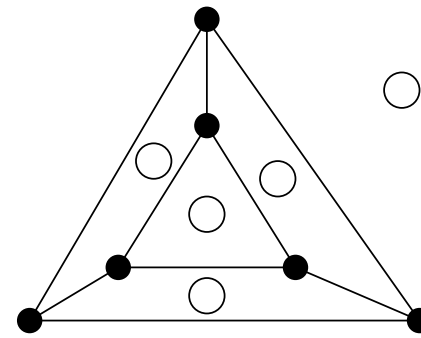
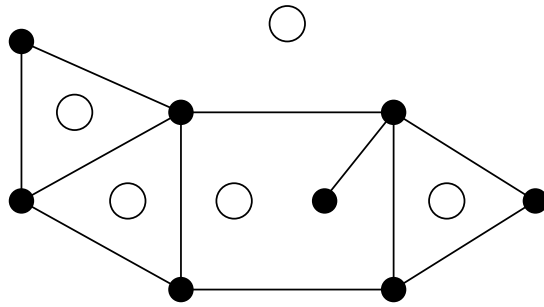


Dual Graphs

Definition. Given a plane drawing of a planar graph G , the **dual graph** $D(G)$ of G is a graph with vertices corresponding to the regions of G . Two vertices in $D(G)$ are connected by an edge **each time** the two regions share an edge as a border.

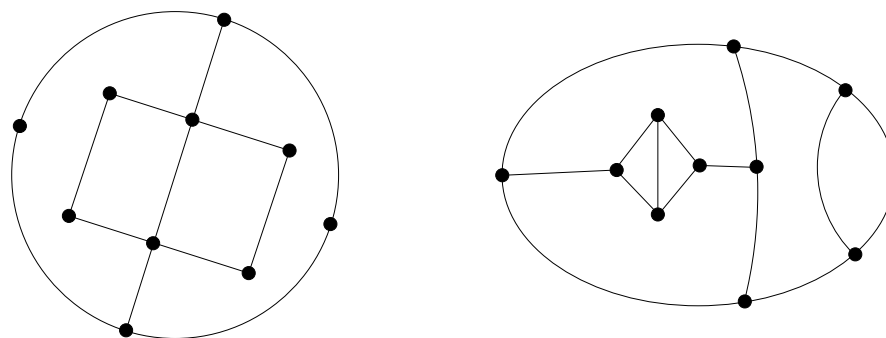


- ▶ The dual graph of a simple graph may not be simple.
 - ▶ Two regions may be adjacent multiple times.
- ▶ G and $D(G)$ have the same number of edges.

Definition. A graph G is **self-dual** if G is isomorphic to $D(G)$.

Maps

Definition. A *map* is a plane drawing of a connected, bridgeless, planar multigraph. If the map is 3-regular, then it is a **normal map**.




Definition. In a map, the regions are called **countries**. Countries may share several edges.

Definition. A **proper coloring** of a map is an assignment of colors to each country so that no two adjacent countries are the same color.

Question. How many colors are necessary to properly color a map?

Proper Map Colorings

Lemma 8.2.2. If M is a map that is a union of simple closed curves, the regions can be colored by two colors.



Proof. Color the regions R of M as follows:

$$\left\{ \begin{array}{l} \text{red} \quad \text{if } R \text{ is enclosed in an odd number of curves} \\ \text{blue} \quad \text{if } R \text{ is enclosed in an even number of curves} \end{array} \right\}.$$

This is a proper coloring of M . Any two adjacent regions are on opposite sides of a closed curve, so the number of curves in which each is enclosed is off by one.

The Four Color Theorem

Lemma 8.2.6. (The Four Color Theorem)

Every normal map has a proper coloring by four colors.

Proof. Very hard.

★ This is the wrong object ★

Theorem. If G is a plane drawing of a maximal planar graph, then its dual graph $D(G)$ is a normal map.

Maximal Planar:

- ▶ Every face of G is a triangle \rightsquigarrow
- ▶ G is connected \rightsquigarrow
- ▶ G is planar \rightsquigarrow

The Four Color Theorem

Assuming Lemma 8.2.6,

G is maximal planar $\Rightarrow D(G)$ is a normal map
 \Rightarrow countries of $D(G)$ 4-colorable
 \Rightarrow vertices of G 4-colorable
 $\Rightarrow \chi(G) \leq 4$

This would prove:

Theorem 8.2.8. If G is maximal planar, then $\chi(G) \leq 4$.

Remember: Every planar graph is a subgraph of a maximal planar graph. So Lemma C implies:

Theorem 8.2.9. If G is a planar graph, then $\chi(G) \leq 4$.

★ History ★